

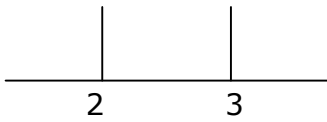
## 2次不等式 (第2段階)

組 番 氏名

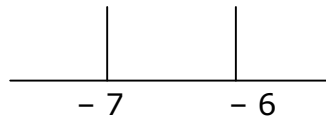
---

(問題) 次の2次不等式を解きなさい。それぞれの部屋に符号(+, -)を書きなさい

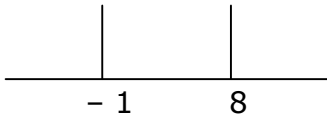
(1)  $(x-2)(x-3) \leq 0$



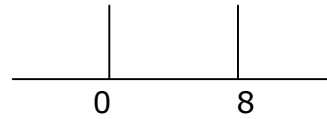
(2)  $(x+7)(x+6) < 0$



(3)  $(x-8)(x+1) > 0$



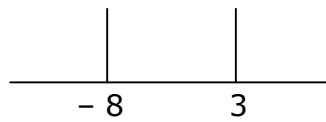
(4)  $x(x-8) \geq 0$



(5)  $-(x+2)(x+6) > 0$



(6)  $(x-3)(x+8) < 0$



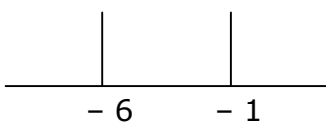
(7)  $(x-6)(x-8) \geq 0$



(8)  $-(x-1)(x+6) \geq 0$



(9)  $-(x+1)(x+6) < 0$



(10)  $(x+4)(x-2) \leq 0$

