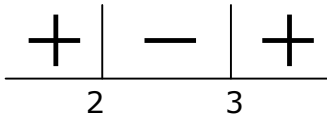


2次不等式 (第3段階)

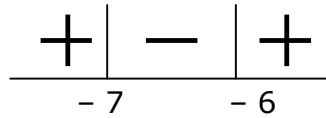
組 番 氏名

(問題) 次の2次不等式を解きなさい。答えの部分に色をつけなさい。

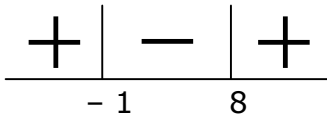
(1) $(x-2)(x-3) \leq 0$



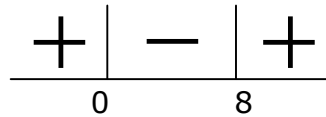
(2) $(x+7)(x+6) < 0$



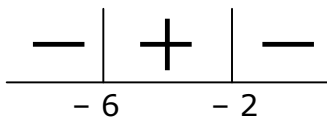
(3) $(x-8)(x+1) > 0$



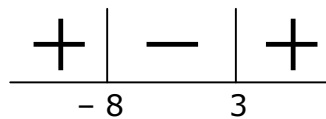
(4) $x(x-8) \geq 0$



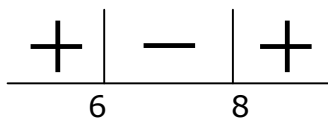
(5) $-(x+2)(x+6) > 0$



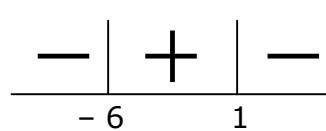
(6) $(x-3)(x+8) < 0$



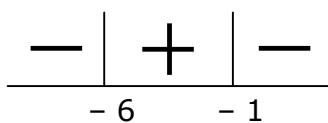
(7) $(x-6)(x-8) \geq 0$



(8) $-(x-1)(x+6) \geq 0$



(9) $-(x+1)(x+6) < 0$



(10) $(x+4)(x-2) \leq 0$

